

LANDSROYND 4. FLOKKUR
MAI 2009

Støddfrøði

45 minuttir



Navn :	Flokkur :	Nr. :
Skúli :	Lærari :	

Svarini verða skrivað á uppgávuarkið. Um tað er ein uppgáva, sum tú ikki dugir, far so víðari. Tú kanst skriva við blýanti.

1.

a) $4 + 5 =$ _____ b) $11 + 15 =$ _____

c) $7 - 3 =$ _____ d) $34 - 11 =$ _____

Kladda

2.

Hvussu nógv kosta allar vøurnar ?



3 kr.



7 kr.



12 kr.



10 kr.

3.

a) Tá Elsa fór í skúla, var klokkan _____



b) Hon fór heim klokkan _____



c) Hvussu longi var Elsa í skúla ? _____

4. Set ring um stórsta talið :

360	31	350	147	250
-----	----	-----	-----	-----

5. Set rétta talið í

a) **4** + = **13**




b) **12** - = **4**


c) : **6** = **4**

d) • = **21**

Kladda

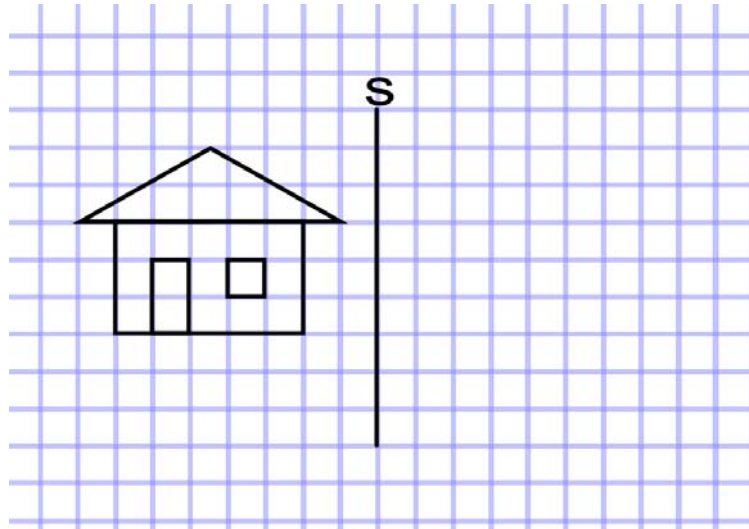
6. Hvussu nógv er av hvørjum ?

8			
7			
6			
5			
4			
3			
2			
1			
			



7.

Spegla um S



8.

09	Januar		Februar
1	H	1	S
2	F	2	M
3	L	3	T
4	S	4	M
5	M	5	H
6	T	6	F
7	M	7	L
8	H	8	S
9	F	9	M
10	L	10	T
11	S	11	M
12	M	12	H
13	T	13	F
14	M	14	L
15	H	15	S
16	F	16	M
17	4	17	T
18	S	18	M
19	M	19	H
20	T	20	F
21	M	21	L
22	H	22	S
23	F 1. ísur	23	M
24	L	24	T
25	S	25	M
26	M	26	H
27	T	27	F
28	M	28	L
29	H		
30	F		
31	L		

- a) Elsa átti 5 ísar.
Hon át ein ís hvønn **fríggjadag** til
ogin var eftir.
Fyrsta ísin át Elsa **23. januar**.

Nær át hon **seinasta** ísin ?

b)

Hvussu nógvir **leygardagar** eru í

februar ? _____

9. Rokna :

Kladda

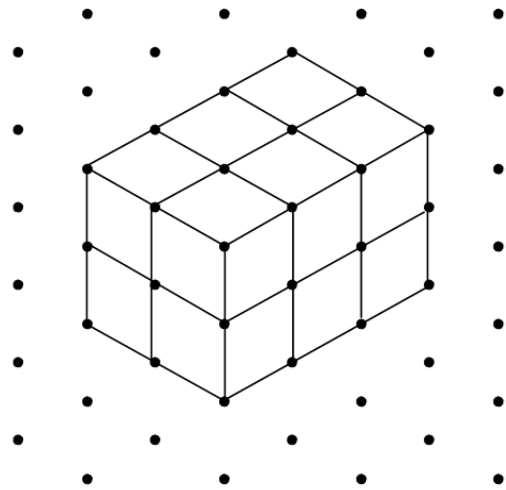
a) $5 \cdot 8 =$ _____

b) $4 \cdot 12 =$ _____

c) $21 \cdot 3 =$ _____

10.

Rúmdin á skapinum er :



11. Máta :

a) Longd = _____ cm



b) Tvørmát = _____ mm

12. Skriva **S** um útsögnin er sonn, og skriva **Ó** um útsögnin er ósonn :

a) $4 \cdot 6 = 8 \cdot 3$

b) $7 + 4 > 6 + 6$

c) $4\frac{1}{2} > 4$

Kladda

13.

a) Tekna fýrkant ABCD

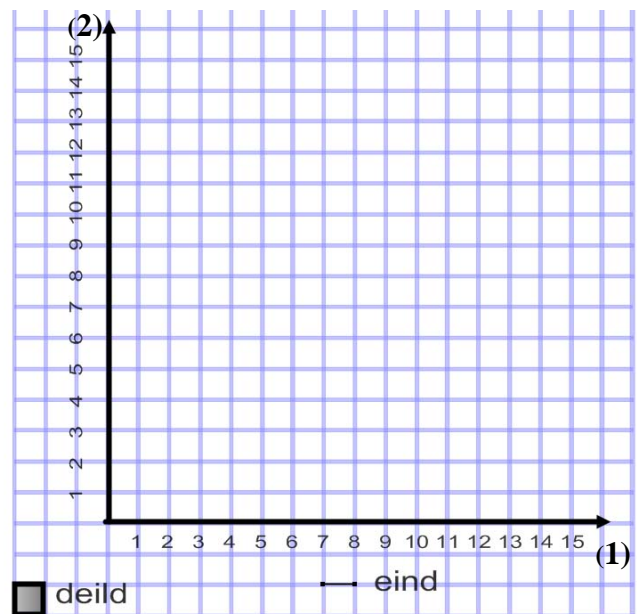
$A = (2, 3)$ $B = (2, 7)$

$C = (7, 7)$ $D = (7, 3)$

b) Víddin á ABCD

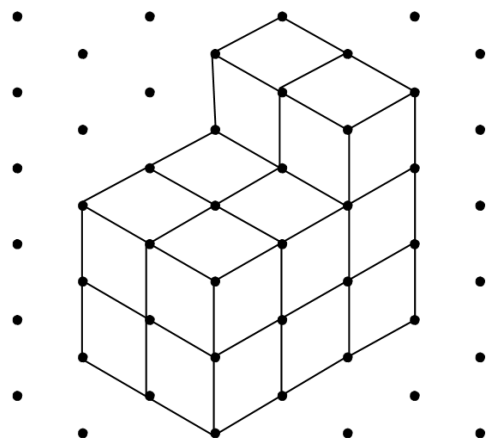
er : _____ deildir

c) Ummálið er : _____ eindir



14.

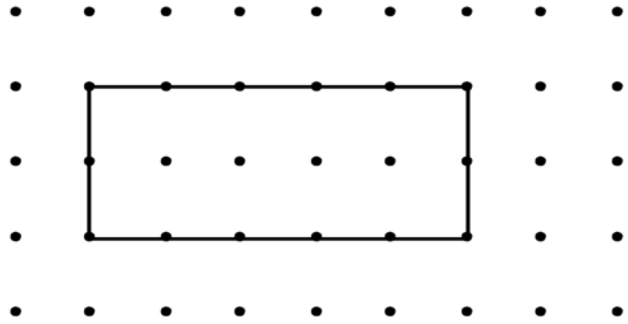
Rúmdin á skapinum er : _____



15.

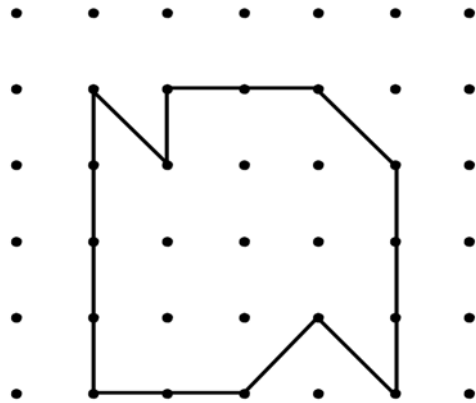
a) Víddin er : _____

b) Ummálið er : _____



16.

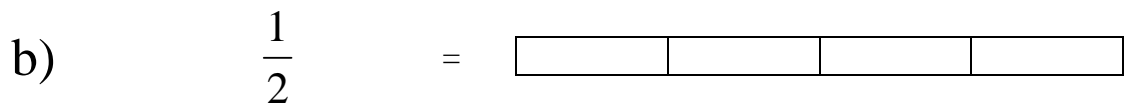
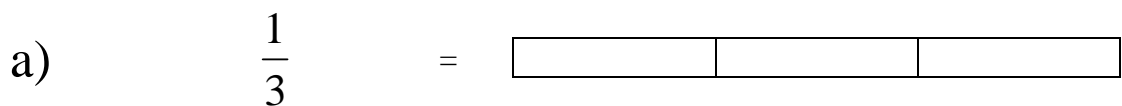
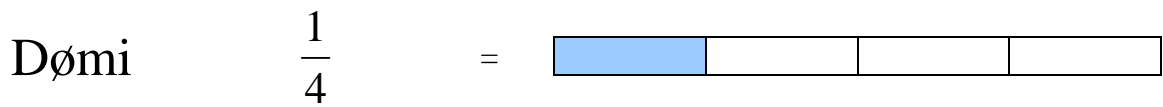
Víddin er : _____




17.

Brot

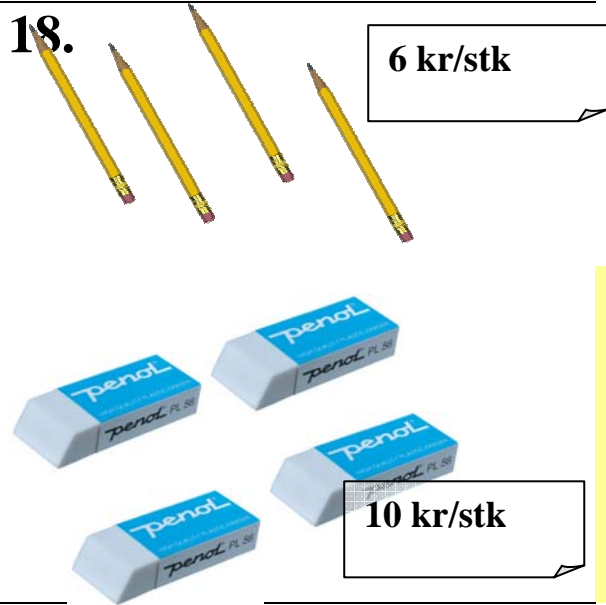
Tekna brotið



c) Skriva brotið sum passar til



18.



Hvussu nógv kosta allar vøurnar ?

Kladda

19. Rokna :

a) $226 + 76 =$ _____

b) $43 - 17 =$ _____

c) $8728 + 495 =$ _____

Kladda

20. Loys líkningarnar :

a) $3 \cdot x + 1 = 10$

b) $\frac{x}{2} - 2 = 0$

c) $x \cdot x \cdot x = 1$

$x =$ _____

$x =$ _____

$x =$ _____